

Name: _____

Constructions


1. Construct the perpendicular bisector of the line segment.



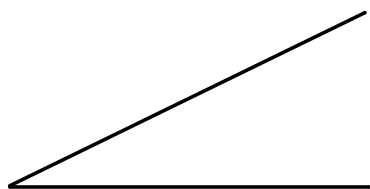
2. Construct a line perpendicular to the segment at the given point.



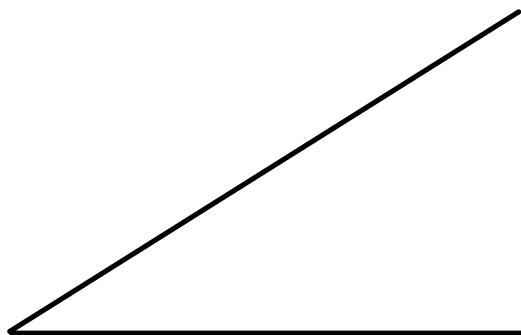
3. Construct a line parallel to the segment at the given point.



4. Construct a congruent angle.



5. Construct an angle bisector.



6. Construct an equilateral triangle.



7. Construct a regular hexagon

