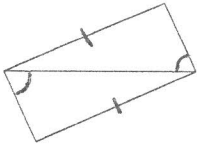


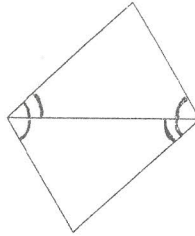
SSS, SAS, ASA, and AAS Congruence

State if the two triangles are congruent. If they are, state how you know.

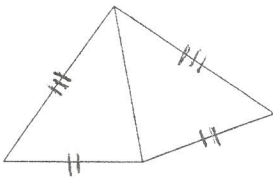
1)



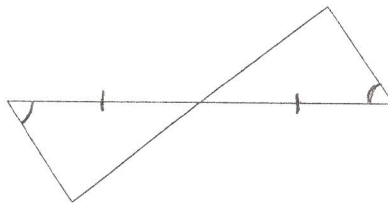
2)



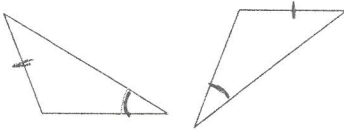
3)



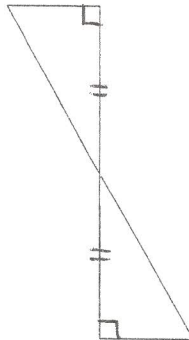
4)



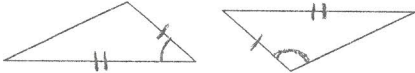
5)



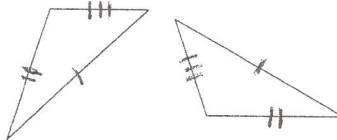
6)



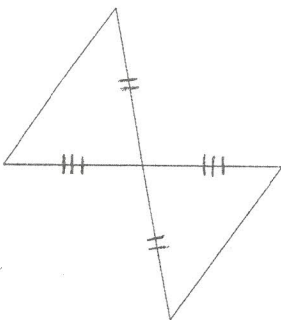
7)



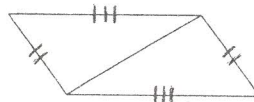
8)



9)



10)



Right Triangle Congruence

State if the two triangles are congruent. If they are, state how you know.

